

# Maths magician addition


Date: \_\_\_\_\_

I can add two groups of objects and say how many there are altogether



You will need:


- coloured pencils



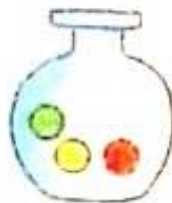
and




makes


  
altogether


and



makes


  
altogether



and




makes


  
altogether


and



makes


  
altogether

### Teacher's notes

Look at the ingredients in the first pair of jars. Count them and draw that number of ingredients in the cauldron. Then write the total in the box. Do the same for the other pairs of jars.