



## Subtracting cats



I can find how many are left by subtracting



How many cats are left?



How many cats are left?



How many cats are left?



**Teacher's notes**

How many cats are there in the first picture? How many are walking away? How many are left? Write the answer in the space. Now work out how many cats are left in each of the other three sets of pictures and write the answers in the spaces.

