

# Mass

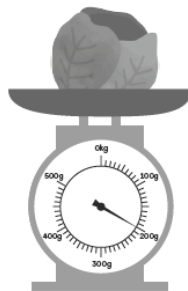
## Chapter 6

Name: \_\_\_\_\_ Class: \_\_\_\_\_ Date: \_\_\_\_\_

### Worksheet 1

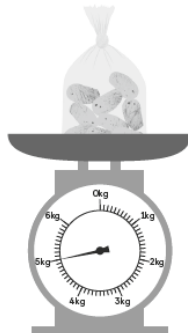
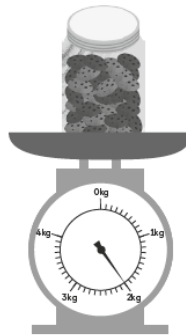
#### Reading Weighing Scales

Find the mass of each item below.



(a) The cabbage weighs  
about  g.

(b) The jar of cookies weighs  
about  kg.



(c) The bag of potatoes weighs  
about  kg.