
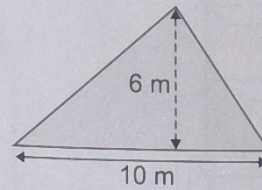

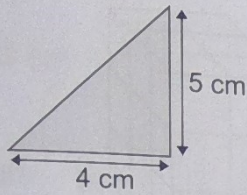



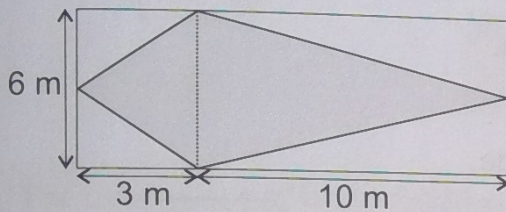
Areas of Triangles and Parallelograms

- 1 Find the area of each triangle below.




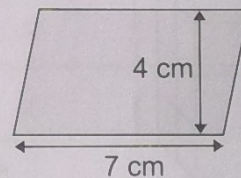

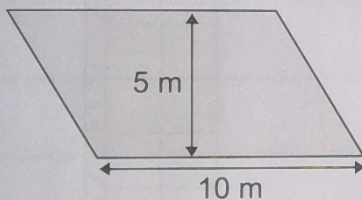
2 marks

- 2 The kite below is made from two triangles. Find its area.



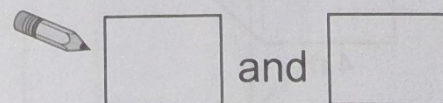
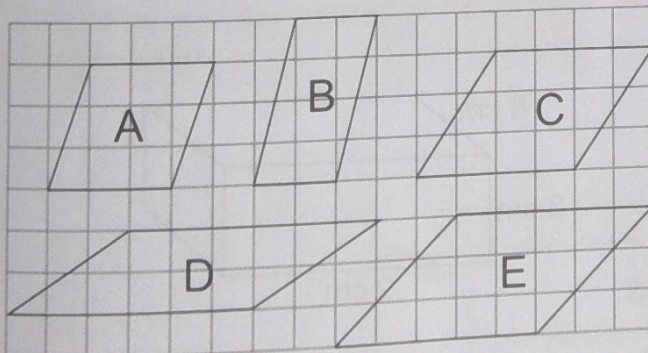
2 marks

- 3 Find the area of each parallelogram below.



2 marks

- 4 Give the letters of the two parallelograms which have the same area.



2 marks

"I can calculate the area of a triangle."
I can calculate the area of a parallelogram."

