






Worksheet 2**Identifying Vertices**

1 Circle the vertices on the shapes and complete the table.

	polygon	name of polygon	number of vertices	number of sides
(a)		Triangle	3	3
(b)		Rectangle	4	4
(c)		Square	4	4
(d)		Triangle	3	3
(e)		Rectangle	4	4

What do you notice?

The number of vertices is equal to the number of sides

2 How many vertices and sides does each polygon have?

