


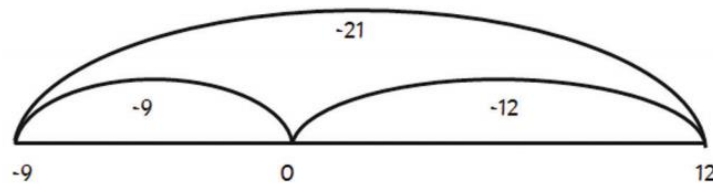
3. Write an explanation, using visual models if needed, showing how to calculate the answers to these problems:



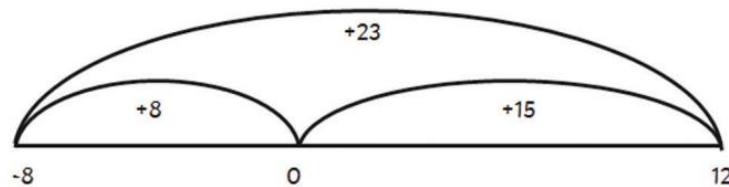
$$12 - 21 =$$
$$-8 + 23 =$$



Compare your explanation with a partner. Can you make any improvements?



-21 can be split into -12 to 0 and -9 beyond 0 to -9.



+23 can be split into +8 to 0 and +15 beyond 0 to 15