



Section 1 Session 5

A 1 Write the missing numbers.




One less



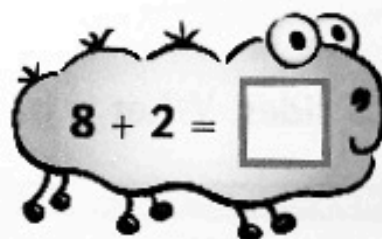

One more



2 Write the answers.



3 Write the totals.



B 4 Write the answers.

What is 1 more than 3?

What is 1 less than 6?

What is 1 more than 4?

What is 1 less than 3?

5 Write the answers.

1 add 4 equals

4 take away 3 equals