
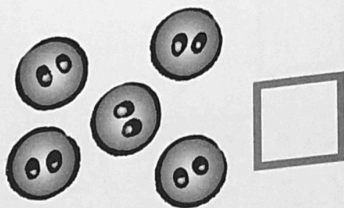






# Section 1 Check-up 1

1

1 Count. Write how many.



2 Count. Write how many.



3 Circle the larger number.

5    9

8    4

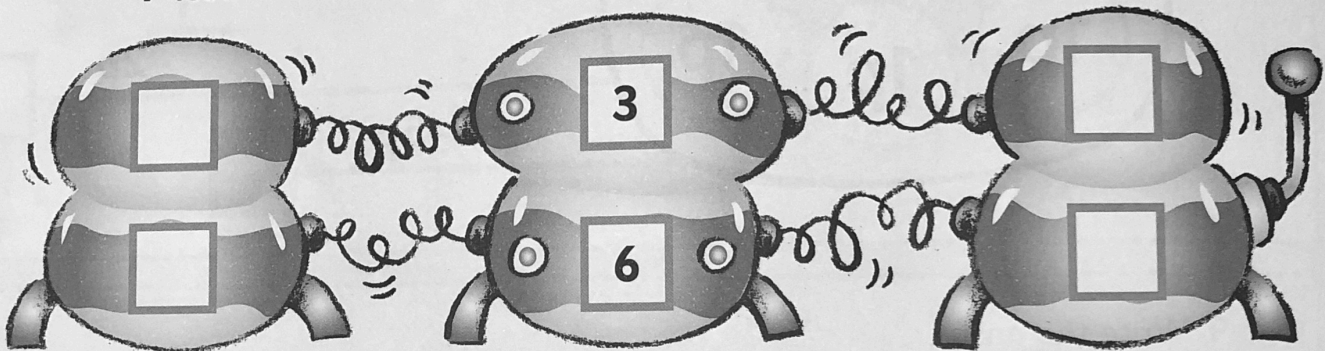
6    1

2    10

4 Write the answers.

1 less

1 more



5 Write the answers.

$$1 + 4 = \square$$

$$3 + 2 = \square$$

$$5 - 1 = \square$$

$$4 - 3 = \square$$

$$2 + 2 = \square$$

$$2 - 2 = \square$$