

6 Write the missing numbers.

$5 + 5 = \square$

$4 + 6 = \square$


$9 + 1 = \square$

$2 + \square = 10$

$6 + \square = 10$



$\square + 4 = 10$

7 Join the shapes to their labels.




Square

Triangle



Circle

Rectangle



8 Write the answer.

Jamil has **5** toy cars. He gives **3** toy cars to Tom.

How many toy cars has Jamil now?

9 Write the answer.

Mia has **3** biscuits. Rosie has **2** biscuits.

How many biscuits are there altogether?

10 Write the answer.

Alice has **6** pencils. Jack has **4** pencils.

How many pencils is that altogether?