



Section 2 Session 1

A

1 Count the insects. Write how many.





2 Continue the count.

2	3	4	5	
---	---	---	---	--

6	7	8	9	
---	---	---	---	--

3 Tick the longer one.



B

4 Draw 12 dots.

5 Write the missing numbers.

3	4		6	
6	7			10