

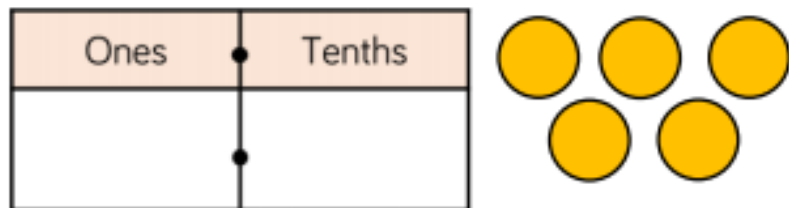
Use five counters and a place value grid. Place all five counters in either the ones or the tenths column.

How many different numbers can you make?

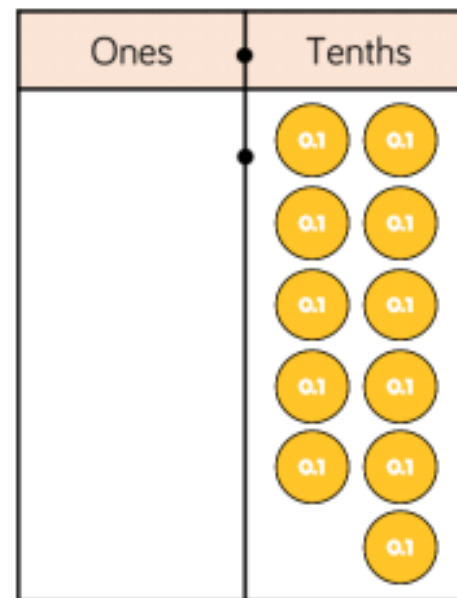
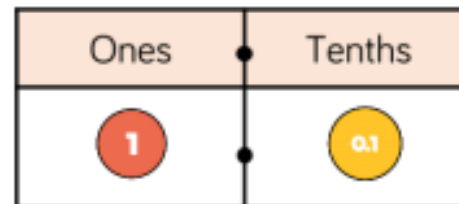
Describe the numbers you have made by completing the stem sentences.

There are ones and tenths.

ones + tenths =



Two children are making eleven tenths.



Who has made it correctly?
Explain your answer.