


Tommy is weighing a toy car.



Use this to work out what the other children's cars weigh.



My car weighs 1 kg more than Mo's.

Alex



My car weighs 200 g less than Tommy's.

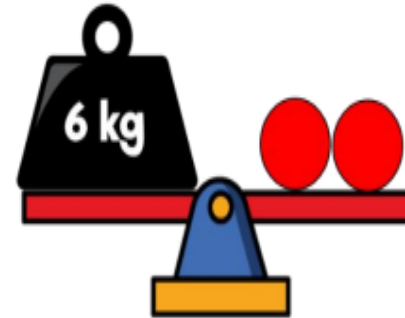
Mo



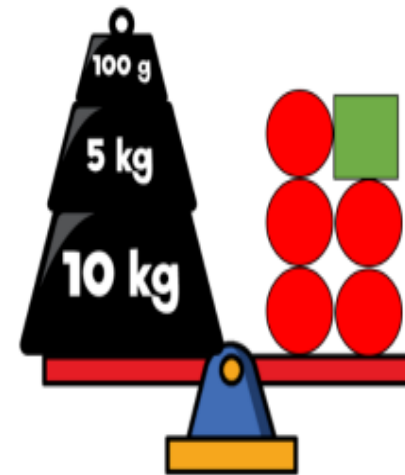
My car weighs 1 kg and 300 g less than Alex's.

Dexter

Here is a balance.



Here is another.



Work out the value of



Can you create your own version for a partner?