








Name: _____ Class: _____ Date: _____

Worksheet 6

Solving Problems Involving Money



1 Calculate the total cost of each.

(a)		£3.30
(b)		£8.34
(c)		£7.96
(d)		£10.10



2 Calculate the change.

(a)



has £10.

He buys



.

His change is £

4.44

.

(b)



has £10.

She buys



and



.

Her change is £

2.79

.

(c)



has £10.

He buys



and



.

His change is £

2.72

.