






Name: \_\_\_\_\_ Class: \_\_\_\_\_ Date: \_\_\_\_\_

## Worksheet 5

### Solving Problems Involving Money














**1** Calculate the total cost of each group of fruit.

(a)		£5.27
(b)		£12.25
(c)		£10



**2** Calculate the change.

- (a)  has £10.  
He buys  .  
His change is £ 8.02 .
- (b)  has £10.  
She buys  and  .  
Her change is £ 5.37 .
- (c)  has £10.  
He buys  and  .  
His change is £ 4.06 .
- (d)  has £10.  
She buys  and  .  
Her change is £ 1.52 .