



Name: \_\_\_\_\_ Class: \_\_\_\_\_ Date: \_\_\_\_\_

## Worksheet 2

### Writing Amounts of Money

1 Write the amount of money in £.



£ 0.26



£ 0.80




£ 1.22



£ 3.58

2 Match.



<div>£0.48</div>	<div>£1 and 35p</div>
<div>£1.35</div>	<div>£2 and 9p</div>
<div>£2.09</div>	<div>48p</div>

Red lines connect £0.48 to £2 and 9p, £1.35 to £1 and 35p, and £2.09 to 48p.



**3** Circle the coins which make up the correct amount.


(a)




(b)



(c)



(d)



(e)

