

Name: _____ Class: _____ Date: _____


Worksheet 2

Writing Numbers to 40


1 Count in tens and ones.
Match.



2 How many  are there?




There are .




There are .

3 How many dots are there?



There are dots.



There are dots.