


Name: _____ Class: _____ Date: _____

Worksheet 3

Counting in Tens and Ones

- 1 Count in tens and ones.
Write the missing numbers.

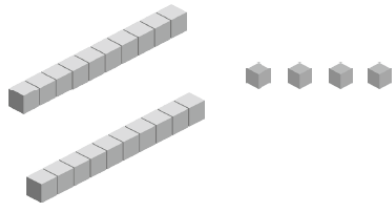
(a)



tens	ones

20 = 2 tens 0 ones


(b)



tens	ones

24 = tens ones


(c)



tens	ones

= tens ones


(d)



tens	ones

= tens ones

(e)

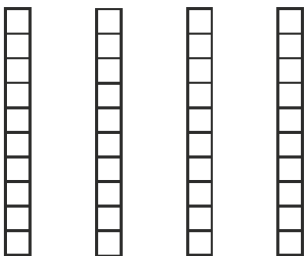


tens	ones

= tens ones

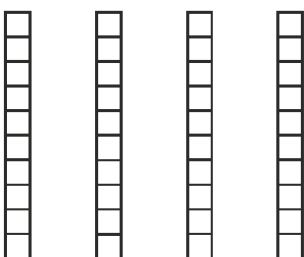
- 2 Colour the correct number of squares to show the number.
Write the missing numbers.

(a)



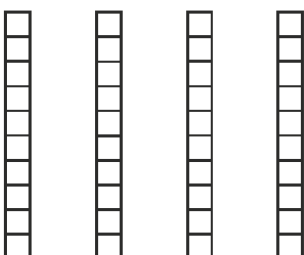
21 = tens ones

(b)



37 = tens ones

(c)



40 = tens ones

- 3 Write the numbers in tens and ones.

	tens	ones
(a) 13		
(b) 23		
(c) 33		
(d) 11		
(e) 21		
(f) 38		

- 4 Write in numbers.

(a) 4 tens =

(b) 1 ten 6 ones =

(c) 2 tens 9 ones =

(d) 3 tens 1 one =

(e) 3 tens 7 ones =