

Fractions

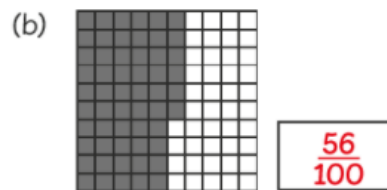
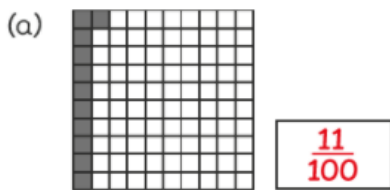
Chapter 6

Name: _____ Class: _____ Date: _____

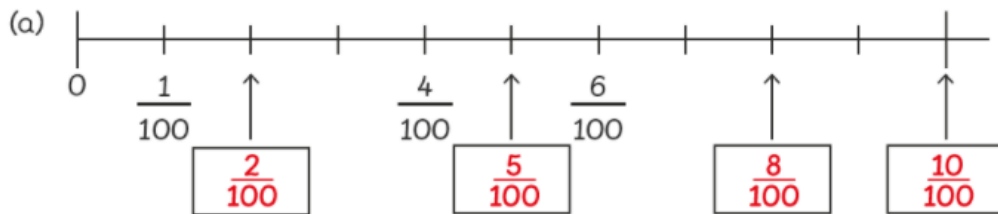
Worksheet 1

Counting in Hundredths

1 What fraction of the block is shaded?



2 Fill in the blanks.



(b) $\frac{18}{100}$, $\frac{19}{100}$, $\frac{20}{100}$, $\frac{21}{100}$, $\frac{22}{100}$, $\frac{23}{100}$, $\frac{24}{100}$, $\frac{25}{100}$

(c) $\frac{89}{100}$, $\frac{87}{100}$, $\frac{85}{100}$, $\frac{83}{100}$, $\frac{81}{100}$, $\frac{79}{100}$, $\frac{77}{100}$, $\frac{75}{100}$