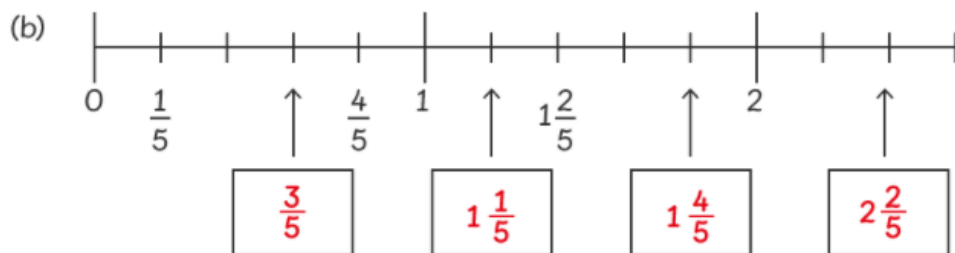
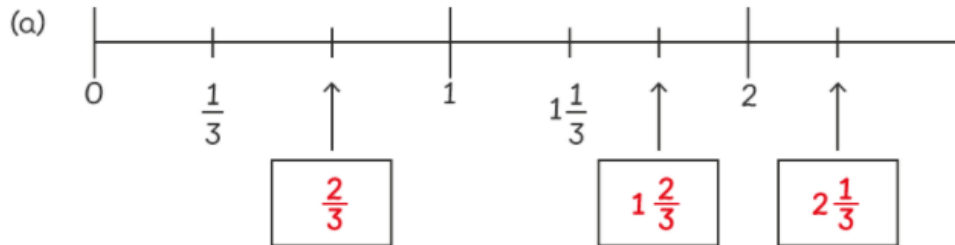


Worksheet 3

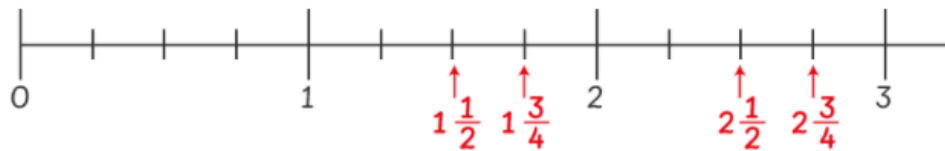
Showing Mixed Numbers on a Number Line

1 What are the missing numbers?



2 Show the following numbers on the number line.

(a) $1\frac{1}{2}$, $2\frac{3}{4}$, $2\frac{1}{2}$ and $1\frac{3}{4}$



(b) $1\frac{1}{8}$, $2\frac{1}{8}$, $2\frac{3}{8}$ and $1\frac{5}{8}$

