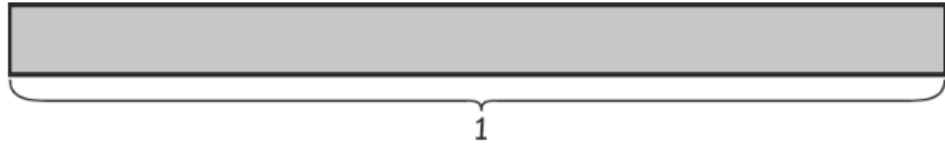


Worksheet 4

Writing Hundredths

- 1 Write the decimal shown by the shaded part.



$$9 \text{ hundredths} = \frac{9}{100} = \boxed{0.09}$$



$$\boxed{15} \text{ hundredths} = \frac{\boxed{15}}{\boxed{100}} = \boxed{0.15}$$

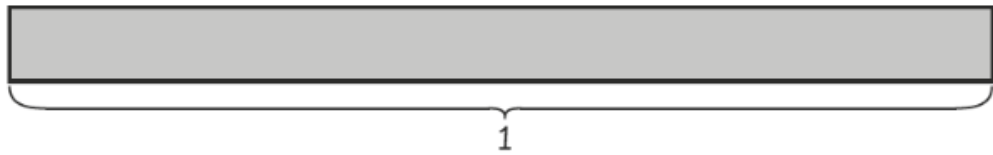


$$\boxed{23} \text{ hundredths} = \frac{\boxed{23}}{\boxed{100}} = \boxed{0.23}$$




$$\boxed{43} \text{ hundredths} = \frac{\boxed{43}}{\boxed{100}} = \boxed{0.43}$$

2 Shade to show the decimal.



(a) 0.05




(b) 0.21



(c) 0.36



(d) 0.52



(e) 0.79

