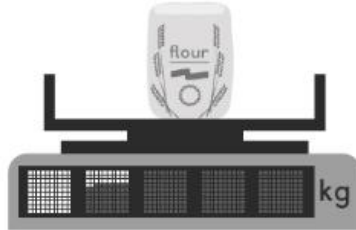


Worksheet 5

Writing Hundredths

1 Write the mass shown on each scale in words and in numbers.

(a)



1.32 kg

one and thirty-two hundredths

(b)



2.45 kg

two and forty-five hundredths

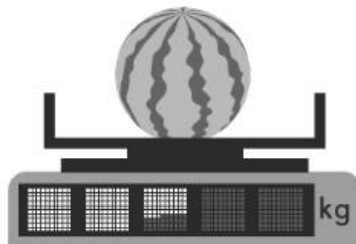
(c)



1.08 kg

one and eight hundredths

(d)




2.64 kg


two and sixty-four hundredths

2 Colour to show the decimal.


(a) 1.25



(b) 1.46



(c) 2.17



(d) 2.50

