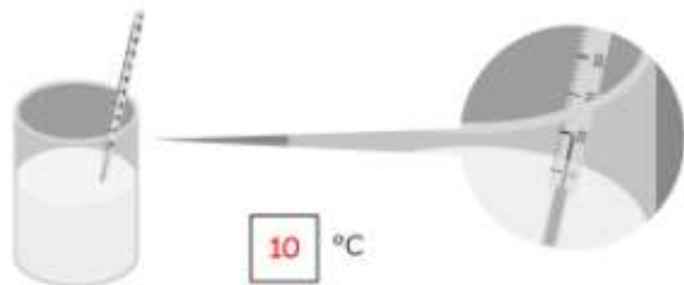


Review 7

1 Find the temperature of the water in each cup and fill in the blank.

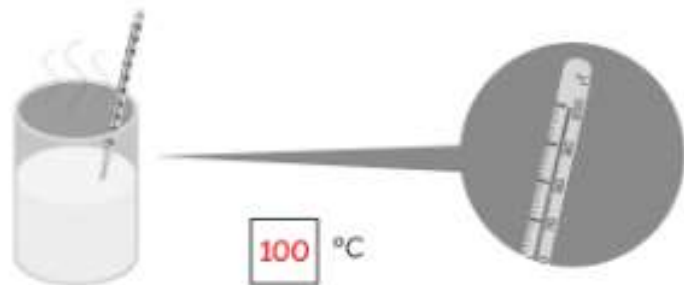
(a)



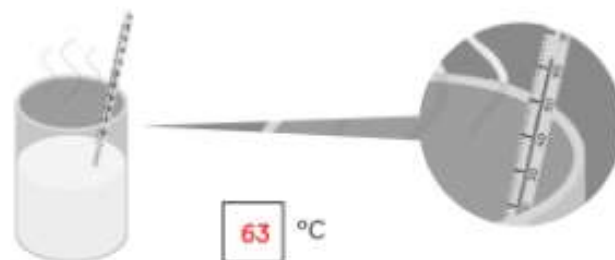
(b)



(c)



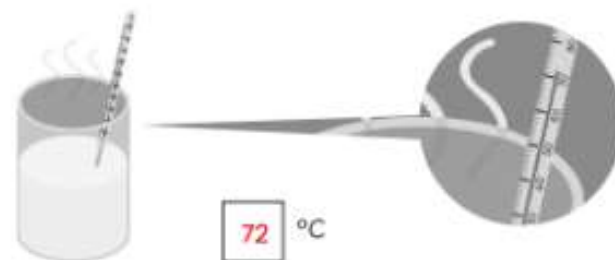
(d)



(e)

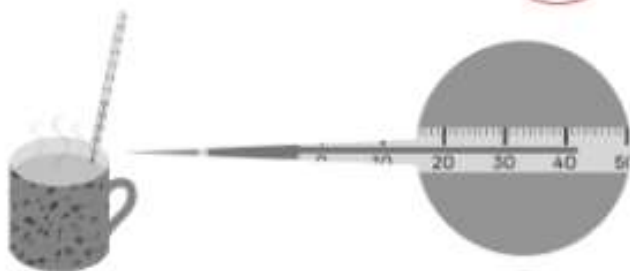


(f)



2 Circle the correct answer.

(a) The temperature of the hot tea is about (40°C / 50°C).



(b) The temperature of the glass of lemonade is about (20°C / 30°C).

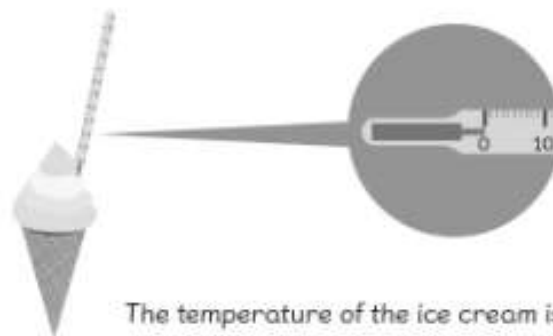


(c) The temperature of the grilled fish is about (40°C / 50°C).



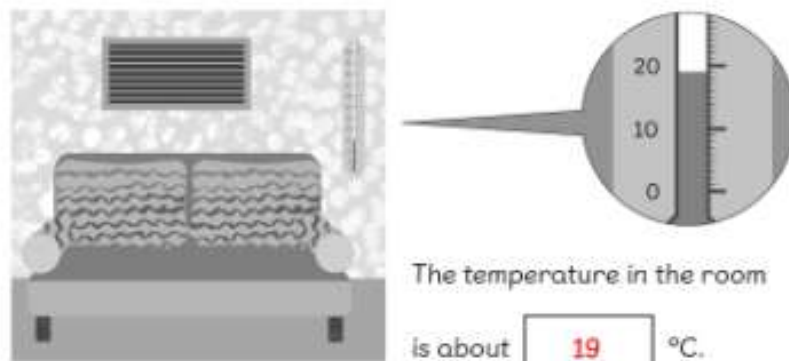
3 Fill in the blanks.

(a)



The temperature of the ice cream is about °C.

(b)



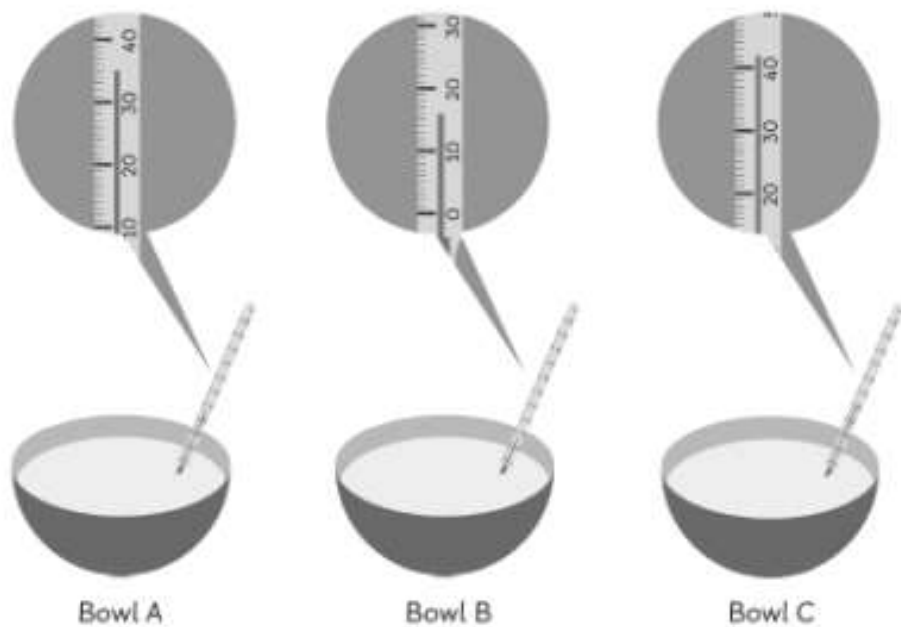
The temperature in the room is about °C.

(c)



The temperature of the glass of milk is about °C.

4 Fill in the blanks.



- (a) The temperature of the water in Bowl A is about °C.
- (b) The temperature of the water in Bowl B is about °C.
- (c) The temperature of the water in Bowl C is about °C.
- (d) The temperature of the water in Bowl is the lowest.
- (e) The temperature of the water in Bowl is the highest.
- (f) Arrange the bowls of water from the hottest to the coolest.

, ,