


Time and Money

- 1 Circle the correct number in each sentence.

 There are 7 / 10 / 24 hours in a day.

There are 24 / 60 / 100 minutes in an hour.

There are 360 / 365 / 366 days in a leap year.

1 mark

- 2 Convert:

2789p into pounds



£

£102.53 into pence



p

2 marks

- 3 Complete the table giving the lengths of two train journeys.



	Time in hours and minutes	Time in minutes
Journey 1	4 hours 10 minutes	minutes
Journey 2	5 hours 45 minutes	minutes

2 marks

- 4 Bob gets 40p a day for washing the dishes.

How much will he get if he washes the dishes every day for 8 days?
Give your answer in pounds.



£

1 mark

Time and Money

5

It is 1 week and 3 days until Isla goes on holiday.

Fill in the boxes below to convert this time into hours.



1 week and
3 days

days

hours

1 mark

6

Sophie buys a clock for £6.50 and a small statue for £10.40.

Sophie pays with a £20 note. How much change will she get?



£

1 mark

7

Amra spends 50 minutes playing a computer game, followed by 23 minutes writing emails.

Amra is only allowed to spend 3 hours on the computer. How much time does she have left?



hour(s) and

minute(s)

2 marks

8

Julian had £5.40 in his piggy bank. He took half of the money and bought some football cards. He got 90p change.

How much were the football cards?



£

1 mark

Time and Money

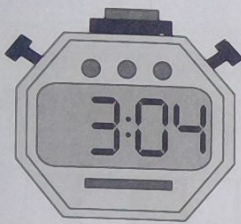
- 9 How many days are there altogether in the months starting with the letter J?



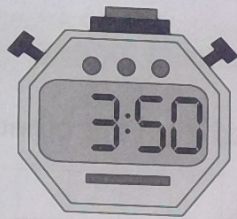
days

2 marks

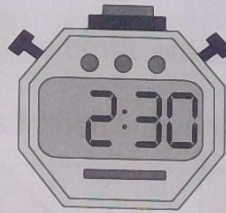
- 10 The stopwatches below show the times in minutes and seconds that it took 4 competitors to finish a lap of a cross-country course.



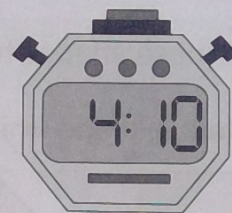
James



Jasper



Tash



Keemia

How many seconds slower was Keemia than Tash?



s

1 mark

Freya finished halfway between James and Jasper. What was her time?



:

1 mark

- 11 Two avocados cost the same amount as five loaves of bread.

One avocado costs £1.15. How much is one loaf of bread?



p

2 marks

"I can convert between units of time.
I can solve problems involving time and money."

