



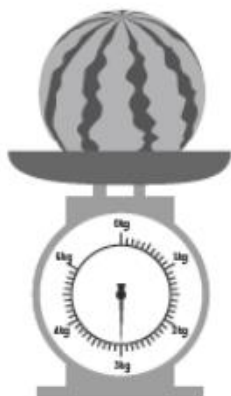
Name: _____ Class: _____ Date: _____

Worksheet 3

Converting Units of Mass


1 Find the mass of each item in g.

(a)



The watermelon weighs 3000 g.

(b)



The cake weighs 1500 g.

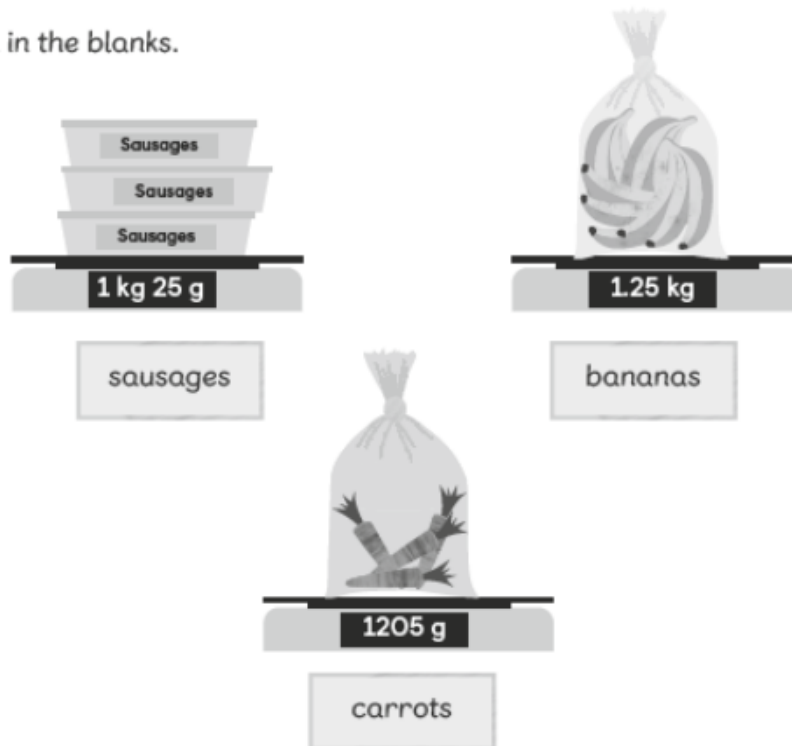
(c)



The cheese weighs 2850 g.



2 Fill in the blanks.



- (a) The mass of the bananas is about **1250** g and the mass of the sausages is **1025** g.
- (b) The **sausages** are the lightest.
- (c) The **bananas** are the heaviest.
- (d) The mass of the carrots is about **1.2** kg, to the nearest 0.1 kg.
- (e) Arrange the items, from the lightest to the heaviest.

sausages , **carrots** , **bananas**