




Name: \_\_\_\_\_ Class: \_\_\_\_\_ Date: \_\_\_\_\_

## Worksheet 5

### Measuring Volume

1 Find the volume of water in each measuring cylinder.

(a)



The volume of water in the measuring cylinder is **0.05** L.

(b)



The volume of water in the measuring cylinder is **0.08** L.

(c)



The volume of water in the measuring cylinder is **0.1** L.

(d)

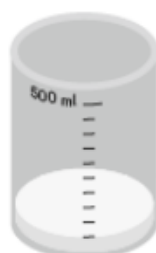


The volume of water in the measuring cylinder is **0.01** L.



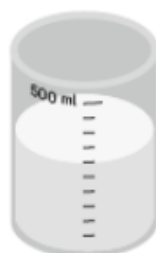
**2** Find the volume of water in each measuring cylinder.

(a)




The volume of water in the measuring cylinder is 0.05 l.

(b)




The volume of water in the measuring cylinder is 0.3 l.

(c)



The volume of water in the measuring cylinder is 0.45 l.

(d)



The volume of water in the measuring cylinder is 0.5 l.