



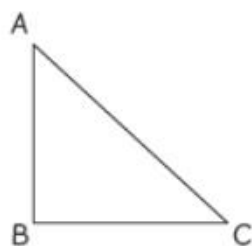
Name: \_\_\_\_\_ Class: \_\_\_\_\_ Date: \_\_\_\_\_

## Worksheet 8

### Measuring Length

- 1** Measure the length of each side of the figure.

(a)




$$AB = \boxed{3.2} \text{ cm}$$

$$AC = \boxed{4.7} \text{ cm}$$

$$BC = \boxed{3.5} \text{ cm}$$

(b)



$$WX = \boxed{2.8} \text{ cm}$$

$$XY = \boxed{4.3} \text{ cm}$$

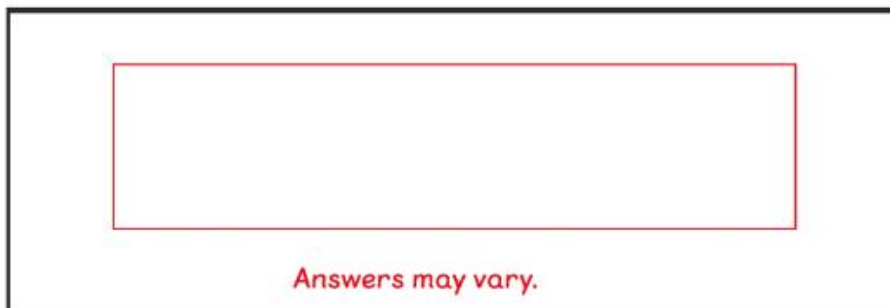
$$ZY = \boxed{2.8} \text{ cm}$$

$$WZ = \boxed{4.3} \text{ cm}$$

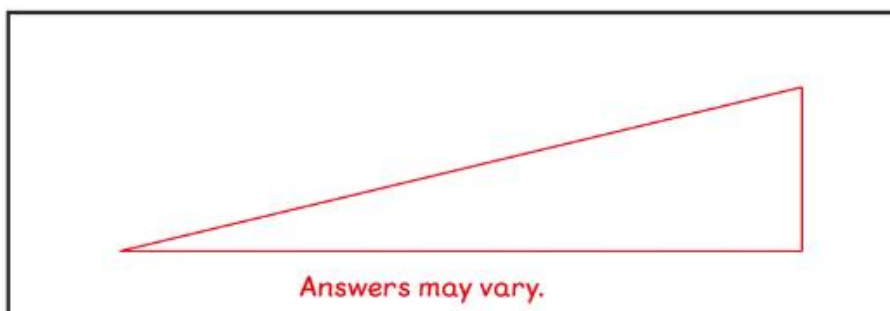


**2** Draw.

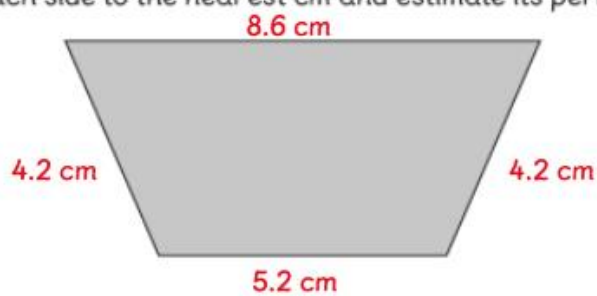
(a) A rectangle that has a perimeter of about 24 cm.



(b) A triangle that has a perimeter of about 24 cm.



**3** Measure each side to the nearest cm and estimate its perimeter.



Perimeter  $\approx$   cm