



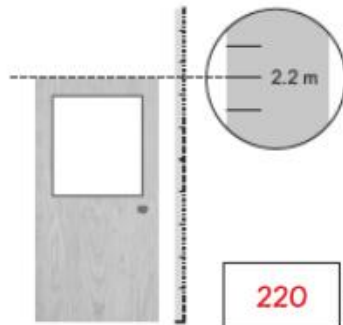
Name: _____ Class: _____ Date: _____

Worksheet 9

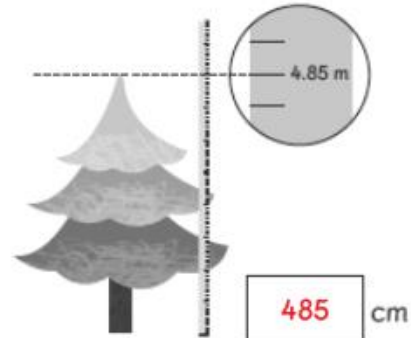
Converting Units of Length

1 Write the length or height of each object in cm.

(a)



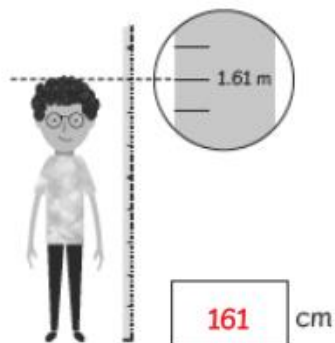
(b)



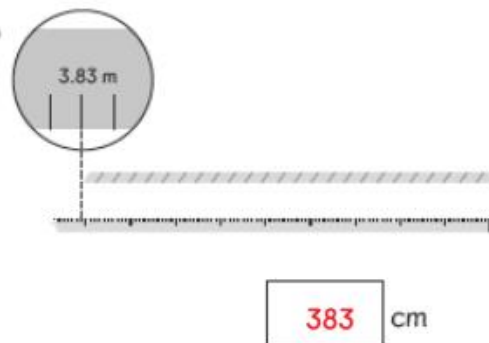
(c)



(d)






(e)





- 2 This table shows the distance travelled by each boy's paper plane.

Name	Distance
 Ravi	5.02 m
 Charles	4.38 m
 Sam	6.19 m

- (a) What is the distance travelled by each plane?

Ravi's plane: m cm

Charles' plane: m cm

Sam's plane: m cm

- (b) Whose plane travelled the furthest?

Sam's

- (c) Whose plane travelled a shorter distance than Ravi's plane?

Charles'

- (d) Sam's plane travelled cm further than Charles' plane.