




Name: _____ Class: _____ Date: _____

Worksheet 12

Solving Problems Involving Scale Reading

1 Read each measurement and fill in the blanks.

(a)



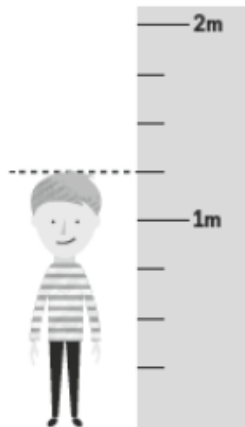
0.25 m

(b)



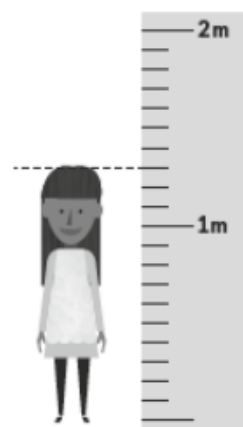
75 m

(c)



1.25 m

(d)



1.3 m



2 Read each measurement, or the total amount, and fill in the blanks.

(a)



0.25 kg

(b)



1.5 kg

(c)



1 l

(d)



3.75 l