



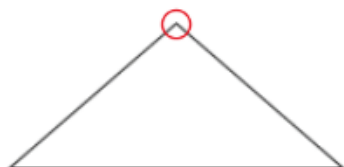
Name: \_\_\_\_\_ Class: \_\_\_\_\_ Date: \_\_\_\_\_

## Worksheet 2

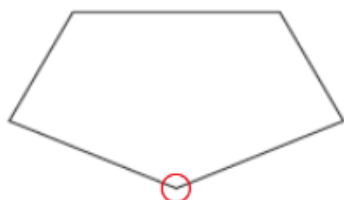
### Comparing Angles

**1** Circle the largest angle in each figure.

(a)



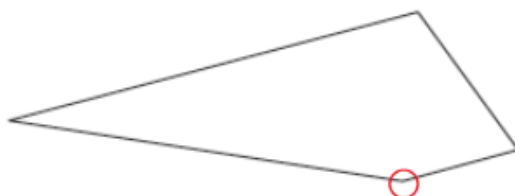
(b)



(c)



(d)



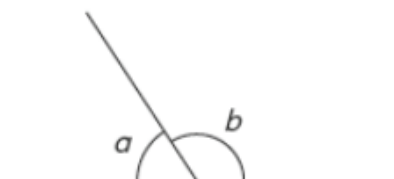
(e)





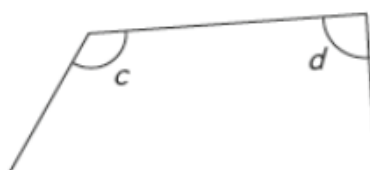
2 Which angle is smaller?

(a)



Angle  is smaller than angle .

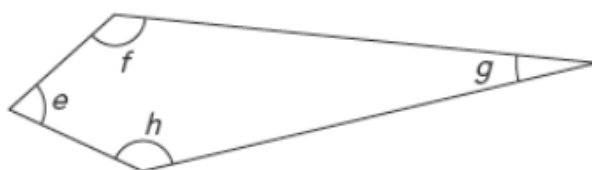
(b)



Angle  is smaller than angle .

3 Which angle is the smallest?

(a)



Angle

(b)

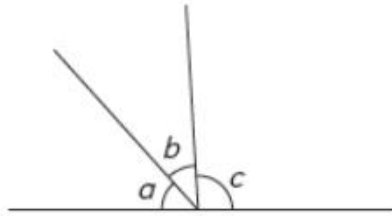


Angle




4 Arrange each group of angles from the largest to the smallest.

(a)



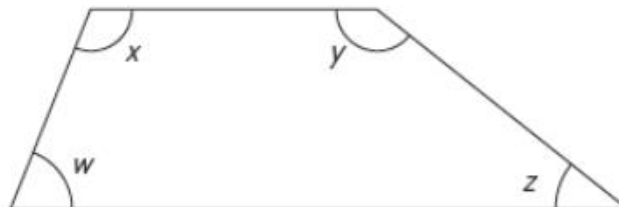
angle , angle , angle

(b)



angle , angle , angle

(c)



angle , angle , angle , angle