



Name: \_\_\_\_\_ Class: \_\_\_\_\_ Date: \_\_\_\_\_

## Worksheet 3

### Classifying Triangles

1 Look at the triangles.

- (a) Colour the scalene triangles green.
- (b) Colour the equilateral triangles red.
- (c) Colour the isosceles triangles blue.





2 Label each triangle.

(a)



equilateral

(b)



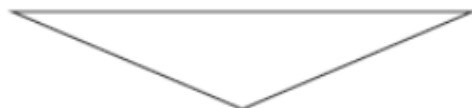
scalene

(c)



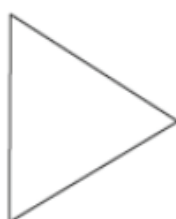
scalene

(d)



isocetes

(e)




equilateral



- 3 Draw two different scalene triangles.

Answers may vary.



- 4 Draw two different equilateral triangles.

Answers may vary.



- 5 Draw two different isosceles triangles.

Answers may vary.

