




Name: _____ Class: _____ Date: _____

Worksheet 5

Identifying Symmetrical Figures

1 Circle the symmetric figures.


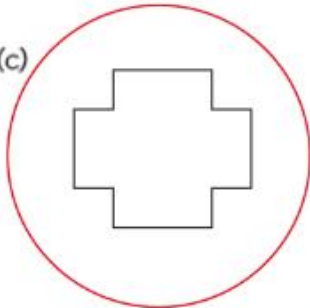
(a)



(b)



(c)



(d)

