

Volume

Chapter 11

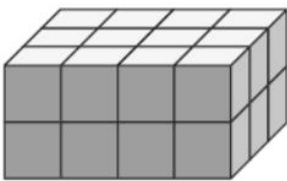
Name: _____ Class: _____ Date: _____

Worksheet 1

Finding the Volume of Cubes and Cuboids

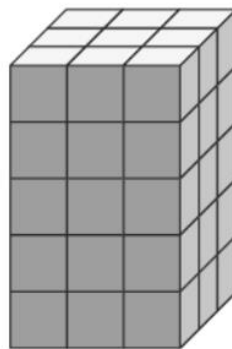
1 The volume of each small cube is 1 cm^3 . Find the volume of each cuboid.

(a)




Volume =

(b)



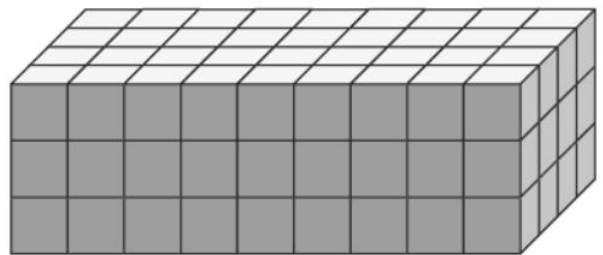
Volume =

(c)



Volume =

(d)




Volume =

Volume

2

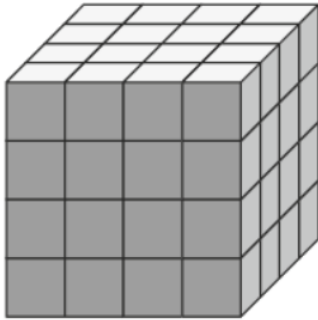
The volume of each small cube is 1 cm^3 . Find the volume of each cube.

(a)




Volume =

(b)



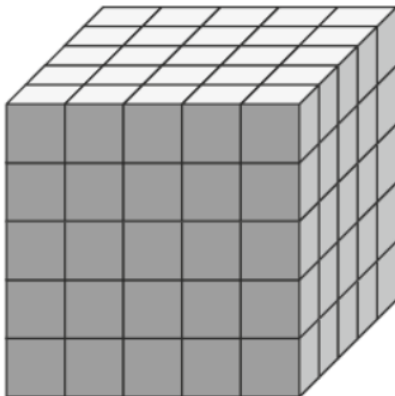
Volume =

(c)



Volume =

(d)



Volume =