






Worksheet 2

Using Negative Numbers

- 1 In a 5-question Science quiz, 4 marks are awarded for each correct answer and 2 marks are deducted for each incorrect answer. No mark is awarded or deducted for questions which are not attempted.  ,  ,  ,  and  took the quiz and the results are shown in this table.

	Number of correct answers	Number of incorrect answers	Not attempted
Ruby	2	2	1
Charles	1	3	1
Lulu	4	1	0
Ravi	2	3	0
Emma	1	4	0

Calculate the score of each student.

- (a) Ruby
- (b) Charles
- (c) Lulu
- (d) Ravi
- (e) Emma

2

According to a website, the average temperature in the UK is about 5°C in the month of January. Find the average temperature of each of the following cities.

- (a) The average temperature in Bangkok, Thailand is 19°C higher than in the UK.

- (b) The average temperature in Seoul, Korea is 7°C lower than in the UK.

- (c) The average temperature in Beijing, China is 9°C lower than in the UK.