

Picture Graphs

Chapter 8

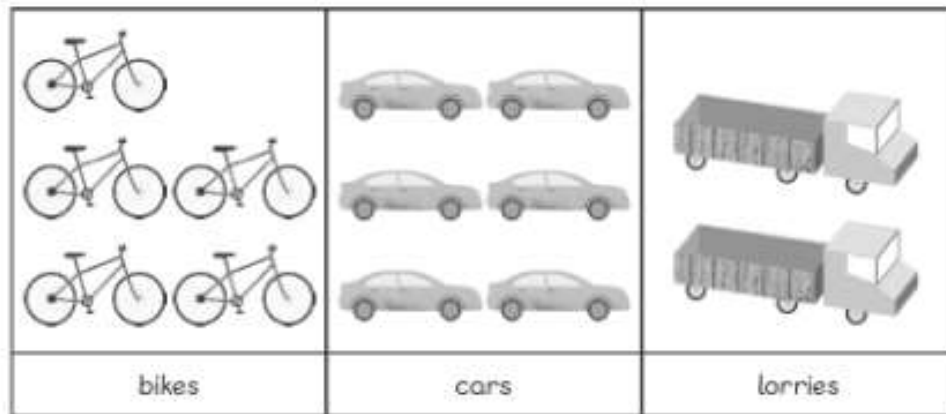
Name: _____ Class: _____ Date: _____

Worksheet 1

Reading Picture Graphs

- 1 The pictogram shows the number of vehicles in a car park. Look at the pictogram and fill in the blanks.

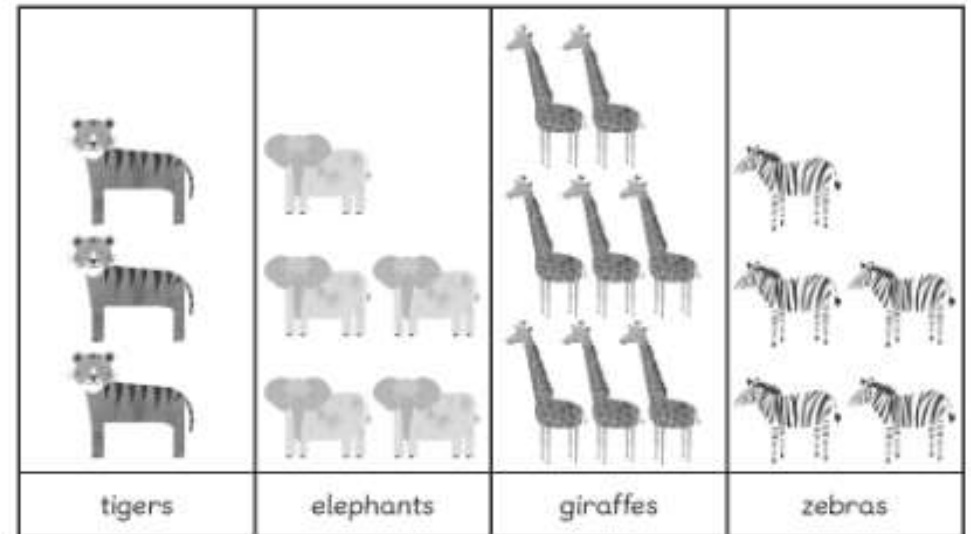
Vehicles in a Car Park



- (a) There are bikes, cars and lorries in the car park.
- (b) The number of is the greatest.
- (c) The number of is the smallest.

- 2 The pictogram shows the number of animals in a zoo. Look at the pictogram and fill in the blanks.




Animals in a Zoo



- (a) There are tigers, elephants, giraffes, and zebras in the zoo.
- (b) The number of is the greatest.
- (c) The number of is the smallest.
- (d) There are more giraffes than elephants.
- (e) The number of elephants is the same as the number of .

- 3 The pictogram shows the different pieces of stationery Hannah has. Look at the pictogram and fill in the blanks.







Hannah's Stationery

pencils	
rubbers	
rulers	

- (a) Hannah has pencils, rubbers, and rulers.
- (b) Hannah has the greatest number of .
- (c) Hannah has the smallest number of .
- (d) Hannah has fewer rubbers than pencils.
- (e) Hannah has more pencils than rulers.
- (f) Hannah has pieces of stationery altogether.

- 4 The pictogram shows the number of fruits in a basket. Look at the pictogram and fill in the blanks.

Fruits in a Basket

apples	
oranges	
pears	
strawberries	
kiwis	
bananas	

- (a) There are fruits altogether.
- (b) The number of is the greatest.
- (c) The number of is the smallest.
- (d) There are more strawberries than oranges.
- (e) There are fewer kiwis than bananas.
- (f) There are as many as .