

Temperature

Chapter 7

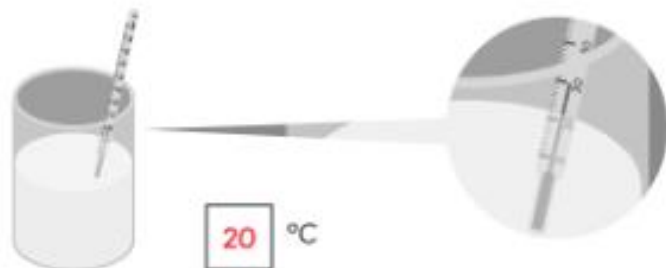
Name: _____ Class: _____ Date: _____

Worksheet 1

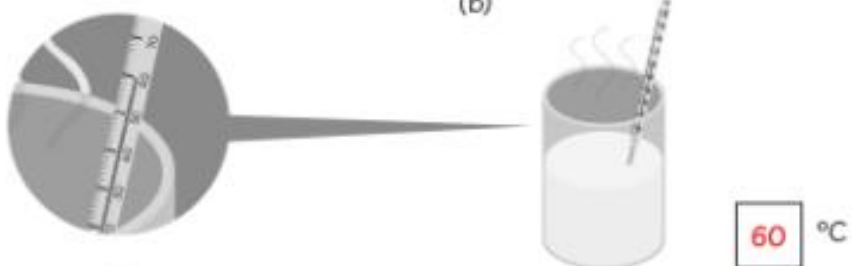
Reading Temperature

1 Find the temperature of water in each cup and fill in the blank.

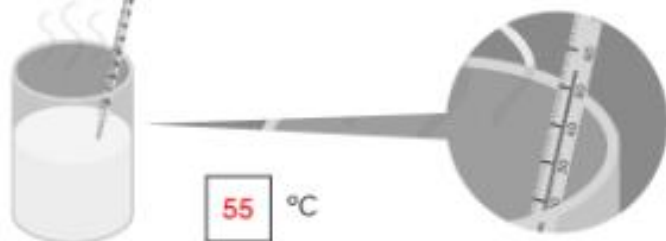
(a)



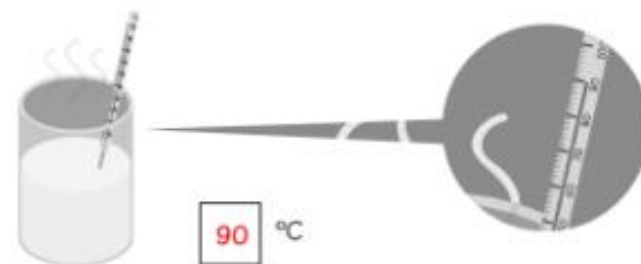
(b)



(c)



(d)



(e)



(f)



2 Fill in the blanks with **less than**, **more than** or **equal to**.

(a)



The temperature is

more than 70 °C.

(b)

The temperature is

equal to 36 °C.



(c)

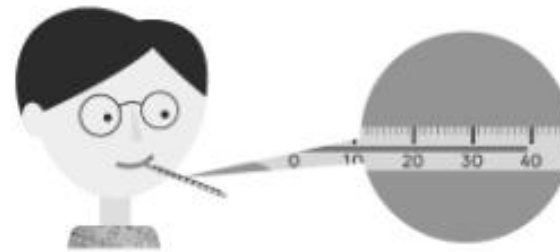


The temperature is

less than 50 °C.

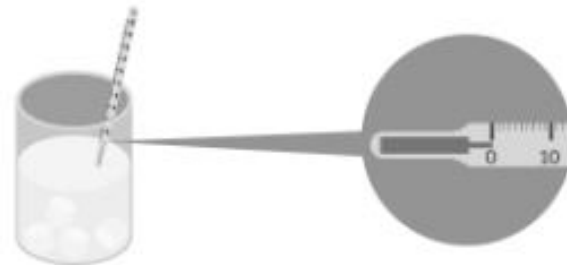
3 Fill in the blanks.

(a)



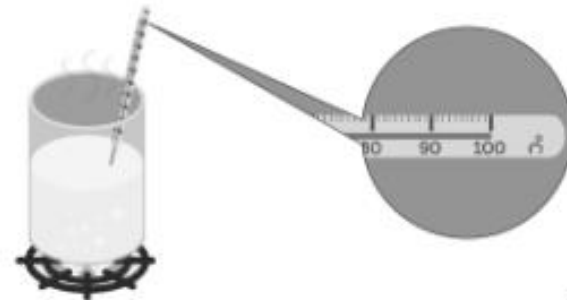
The body temperature of the boy is about **39** °C.

(b)



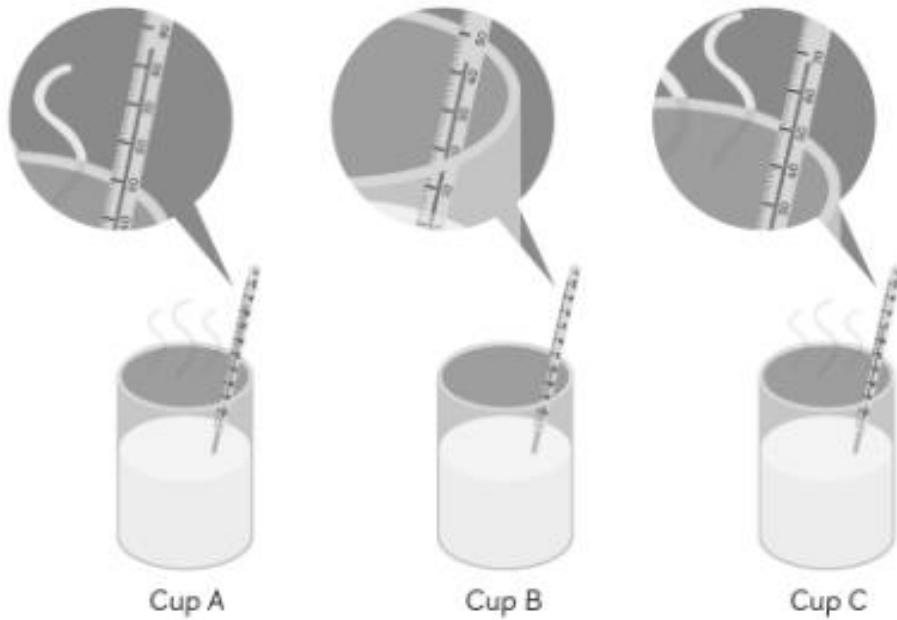
The temperature of the ice water is about **0** °C.

(c)



The temperature of the boiling water is about **100** °C.

4 Fill in the blanks.



(a) The temperature of the water in Cup A is about °C.

(b) The temperature of the water in Cup B is about °C.

(c) The temperature of the water in Cup C is about °C.

(d) The temperature of the water in Cup is the lowest.

(e) The temperature of the water in Cup is the highest.

(f) Arrange the cups of water from the hottest to the coolest.

, ,

