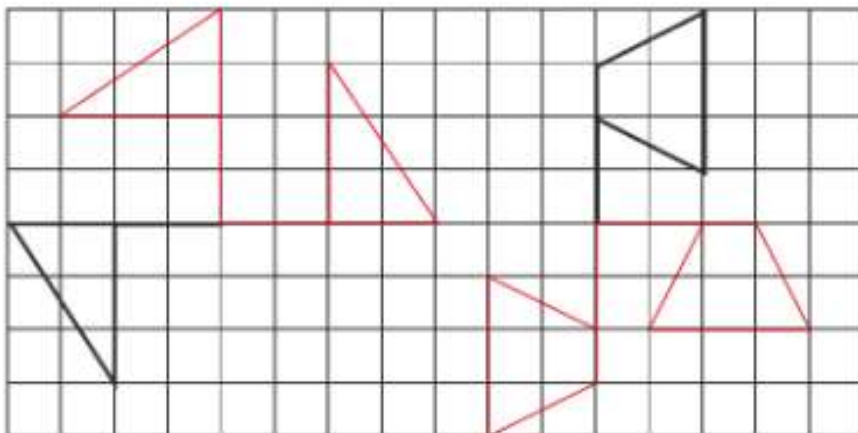


Name: \_\_\_\_\_ Class: \_\_\_\_\_ Date: \_\_\_\_\_

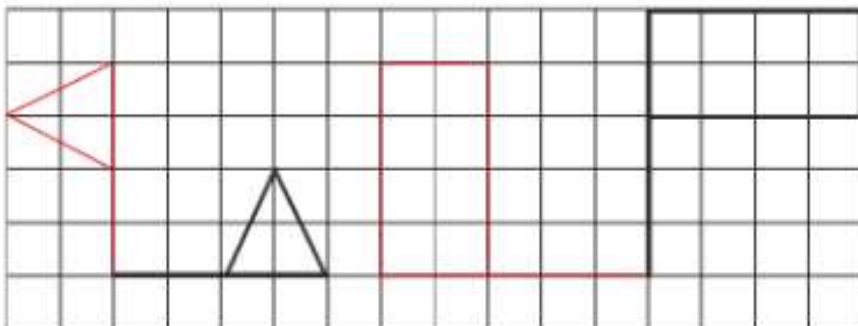
## Worksheet 10

### Turning Shapes

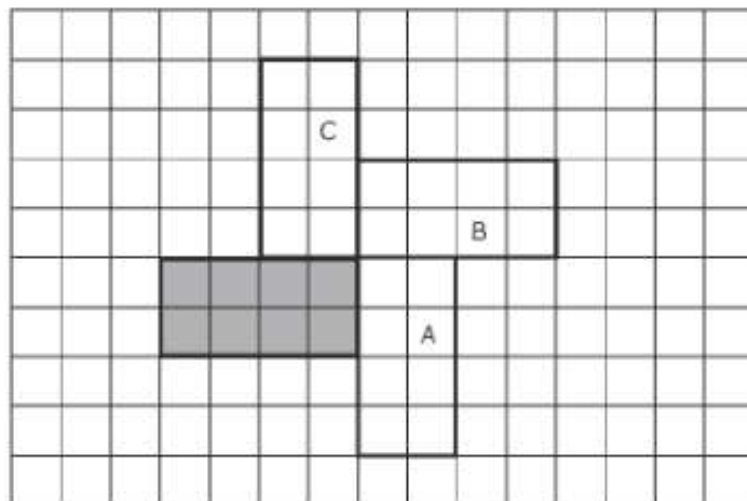
- 1 Move the flags below clockwise by a quarter turn and then clockwise by half a turn. Draw the flags at their two new positions.



- 2 Move the flags below anticlockwise by a quarter turn. Draw the flags at their new positions.



- 3 Each rectangle A, B and C is made by turning the shaded rectangle. Describe how the shaded rectangle is moved.



rectangle A

anti-clockwise, quarter turn

rectangle B

clockwise, half turn

rectangle C

clockwise, quarter turn