

Money







Chapter 10

Name: _____ Class: _____ Date: _____

Worksheet 1

Writing Amounts of Money

Match.

20p	●—————●	
10p	●—————●	
£10	●—————●	
£5	●—————●	
£2	●—————●	
50p	●—————●	


Note: Red lines connect the boxes to the coins as follows: £10 to £5 coin, £5 to £2 coin, £2 to 50p coin, and 50p to 20p coin.

Name: _____ Class: _____ Date: _____

Worksheet 2


Counting Money

Write the amount of money shown.

(a)  £15

(b)  £35

(c)  £50

(d)  £85

(e)  £90