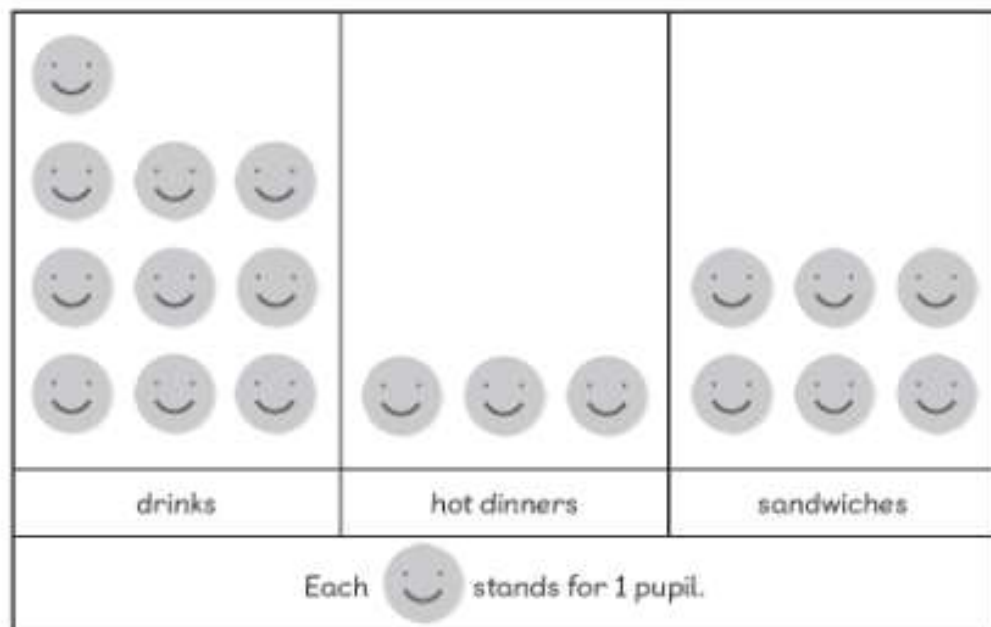


Worksheet 2

Reading Picture Graphs

- 1 The pictogram shows the number of pupils queuing at 3 counters in the lunch hall during break.
Look at the pictogram and fill in the blanks.

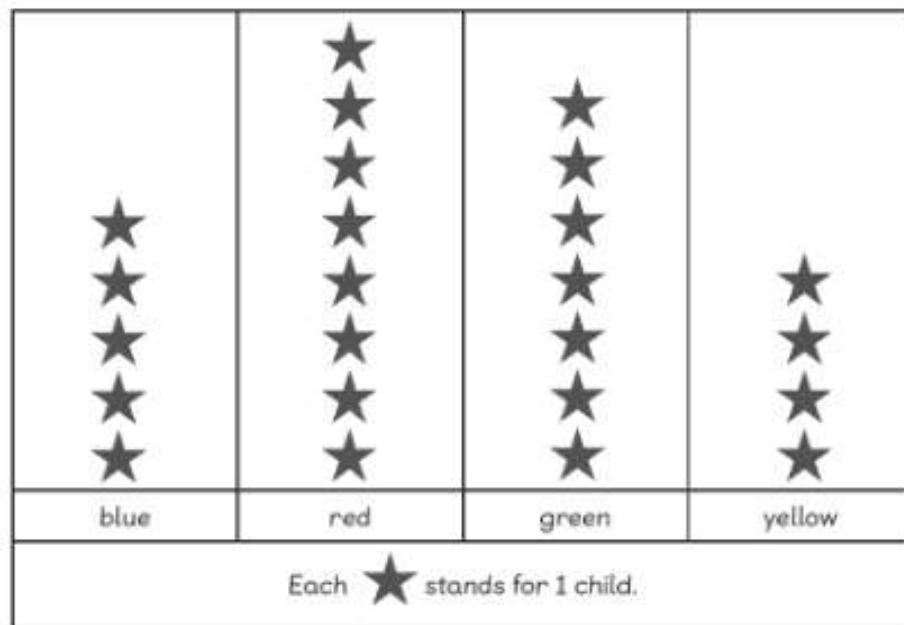
Number of Pupils Queuing



- (a) There are pupils queuing at the sandwich stall.
- (b) The queue at the stall is the longest.
- (c) The queue at the stall is the shortest.

- 2 The pictogram shows the favourite colour of different children in a group.
Look at the pictogram and fill in the blanks.

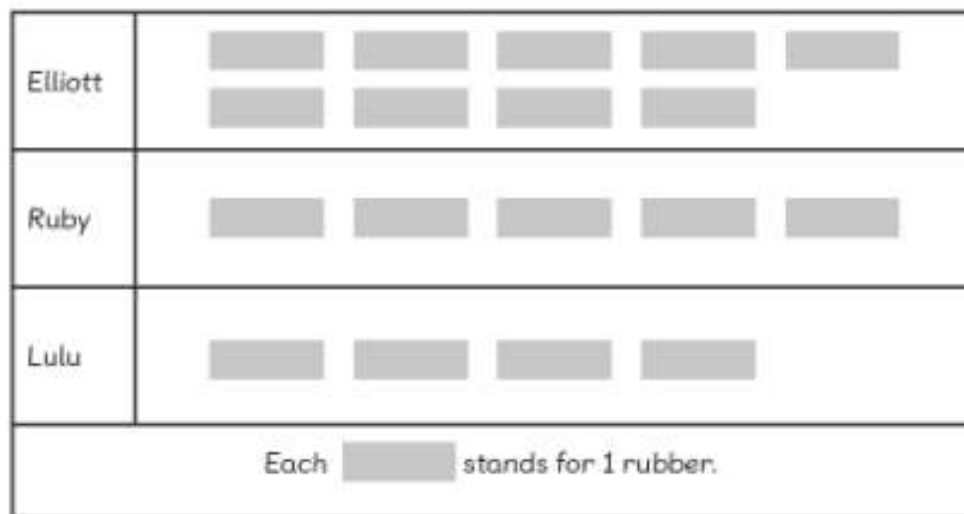
Favourite Colour



- (a) children choose green as their favourite colour.
- (b) is the favourite colour.
- (c) is the least favourite colour.
- (d) more children choose green than blue as their favourite colour.
- (e) fewer children choose blue than red as their favourite colour.

- 3 The pictogram shows the number of rubbers Elliott, Ruby and Lulu have. Look at the pictogram and fill in the blanks.

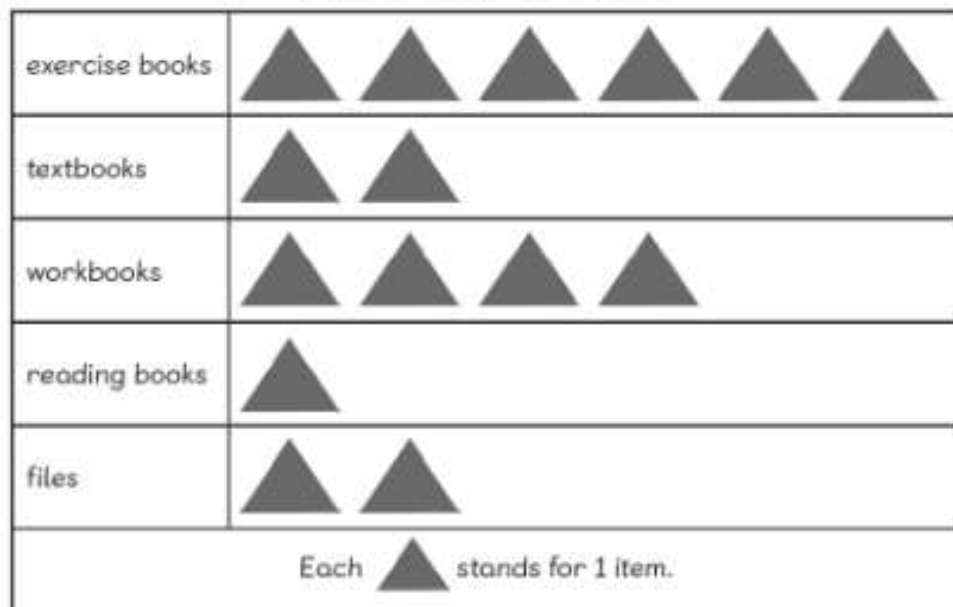
Number of Rubbers



- (a) The three children have **18** rubbers altogether.
- (b) **Elliott** has the most rubbers.
- (c) **Lulu** has the least number of rubbers.
- (d) Elliott has **5** more rubbers than Lulu.
- (e) Lulu has **1** less rubber than Ruby.
- (f) **Elliott** has as the same number of rubbers as **Lulu** and **Ruby**.

- 4 The pictogram shows the number of items found in Amira's drawer. Look at the pictogram and fill in the blanks.

Items in Amira's Drawer



- (a) Amira has **2** textbooks and **6** exercise books.
- (b) Amira has the most **exercise books** and the least number of **reading books** in her drawer.
- (c) Amira has **2** more workbooks than files.
- (d) Amira has 3 more **workbooks** than **reading books**.
- (e) Amira has as many **textbooks** as **files**.