

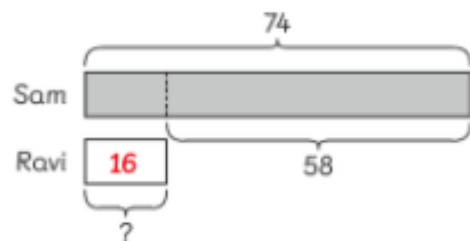
Name: \_\_\_\_\_ Class: \_\_\_\_\_ Date: \_\_\_\_\_

### Worksheet 3

#### Solving Word Problems

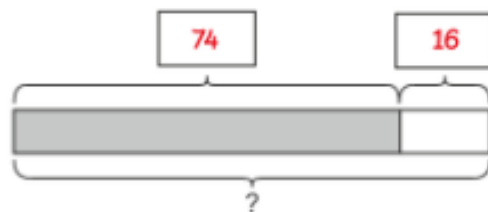
Solve.

- 1 Sam has 74 toy soldiers.  
Ravi has 58 less toy soldiers than Sam.  
How many toy soldiers do Sam and Ravi have altogether?



$$\boxed{74} - \boxed{58} = \boxed{16}$$

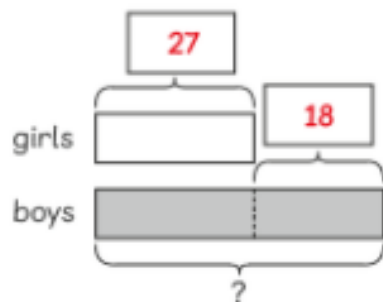
Ravi has  $\boxed{16}$  toy soldiers.



$$\boxed{74} + \boxed{16} = \boxed{90}$$

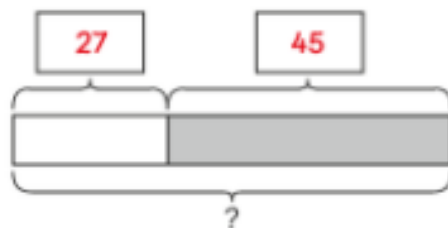
Sam and Ravi have  $\boxed{90}$  toy soldiers altogether.

- 2 There are 27 girls in a classroom.  
There are 18 more boys than girls in the classroom.  
How many pupils are there altogether in the classroom?



$$\boxed{27} + \boxed{18} = \boxed{45}$$

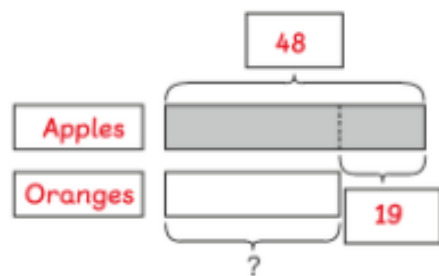
There are  $\boxed{45}$  boys in the classroom.



$$\boxed{27} + \boxed{45} = \boxed{72}$$

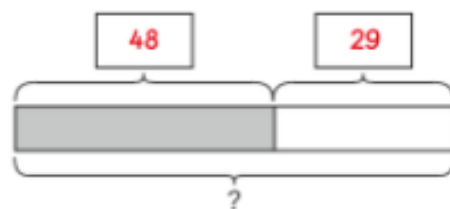
There are  $\boxed{72}$  pupils altogether in the classroom.

- 3 There are 48 apples in a box.  
There are 19 more apples than oranges in the box.  
How many apples and oranges are in the box altogether?



$$48 - 19 = 29$$

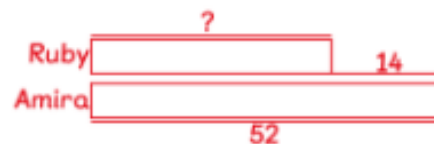
There are  oranges in the box.



$$48 + 29 = 77$$

There are  apples and oranges altogether.

- 4 Amira bakes 52 cupcakes.  
Ruby bakes 14 fewer cupcakes than Amira bakes.  
How many cupcakes do Amira and Ruby bake altogether?



$$52 - 14 = 38$$



$$52 + 38 = 90$$

Amira and Ruby baked 90 Cupcakes altogether