

















Worksheet 6

Exchanging Money

1 Fill in the blanks.

- (a)  = 
- (b)  = 
- (c)  = 
- (d)  = 
- (e)  = 
- (f)  = 
- (g)  = 
- (h)  = 

2 Match the groups of coins to the coin of the same value.