

Worksheet 8

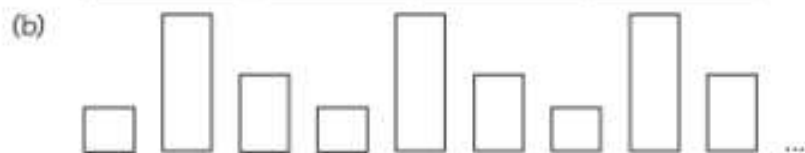
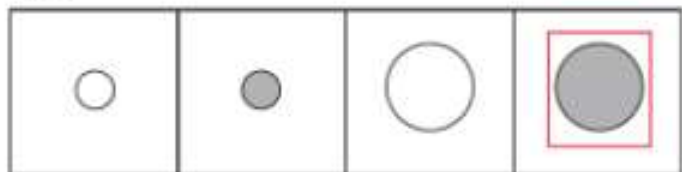
Describing Patterns

1 What is the 15th shape?

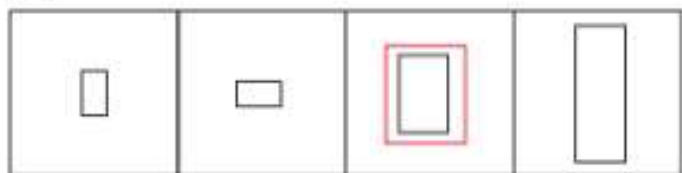
Look at the pattern and circle the 15th shape in the box.



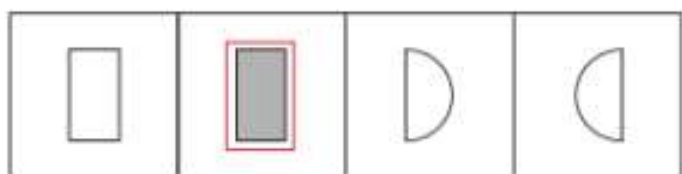
1st



1st



1st



Two-Dimensional Shapes

2 What is the 1st shape?

Look at the pattern and draw the 1st shape in the box.

