




Name: \_\_\_\_\_ Class: \_\_\_\_\_ Date: \_\_\_\_\_

## Worksheet 8

### Calculating Total Amount

1 Fill in the blanks.



- (a) What is the total cost of a pencil and a notebook?
- (b) What is the total cost of a folder and a storybook?
- (c) What is the total cost of a notebook and a storybook?
- (d) What is the total cost of all four items?
- (e) If Hannah wants to buy 3 pencils, how much does she need to pay?

Solve.


- 2 Emma bought an ice cream for 55p. She also bought a lolly for 28p. How much did Emma spend altogether?



$$\boxed{55p} + \boxed{28p} = \boxed{83p}$$

Emma spent  altogether.

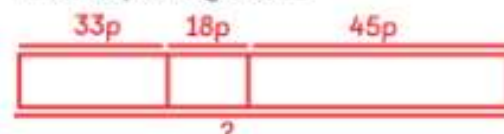
- 3 Ravi's mother gave him £8. His father gave him £23. How much money did they give Ravi altogether?



$$£8 + £23 = £31$$

They gave Ravi £31.

- 4 Holly spent 33p on Monday, 45p on Tuesday and 18p on Wednesday. How much money did Holly spend on the three days altogether?



$$33p + 18p + 45p = 96p$$

Holly spent 96p altogether.